

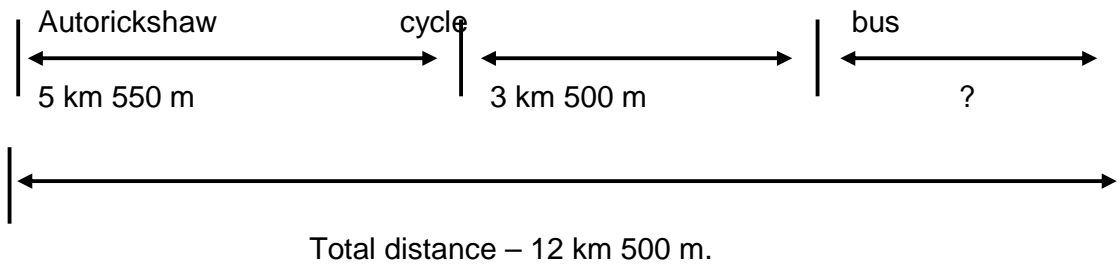
**GWALIOR GLORY HIGH SCHOOL**  
NEEMCHANDOHA SHIVPURI LINK ROAD, GWALIOR  
**Extended Learning Activity Worksheet - (2018-19)**

**SUBJECT : MATHEMATICS**

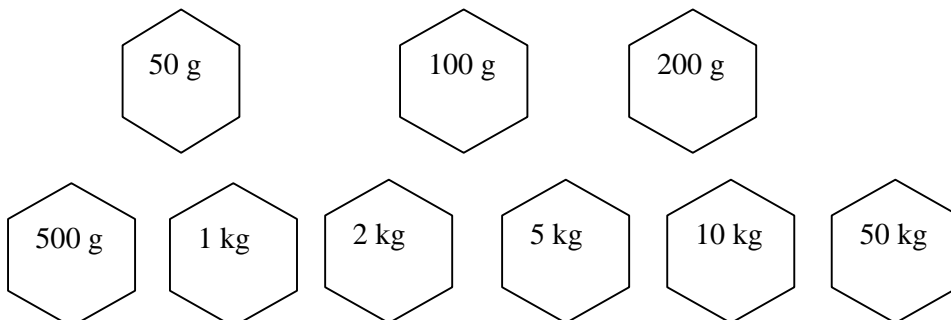
**CLASS - III**

NAME: \_\_\_\_\_ SEC : \_\_\_\_\_ ROLLNO : \_\_\_\_\_ DATE : \_\_\_\_\_

**Q.1 Find the distance travelled by bus.**




**Q.2 The grocer has the following weights with him -**




Using the above weights help him weigh the items listed below


12 kg of oil



37 kg of onion



11 kg 600 gm of rice



950 g of salt



67 kg of wheat

