

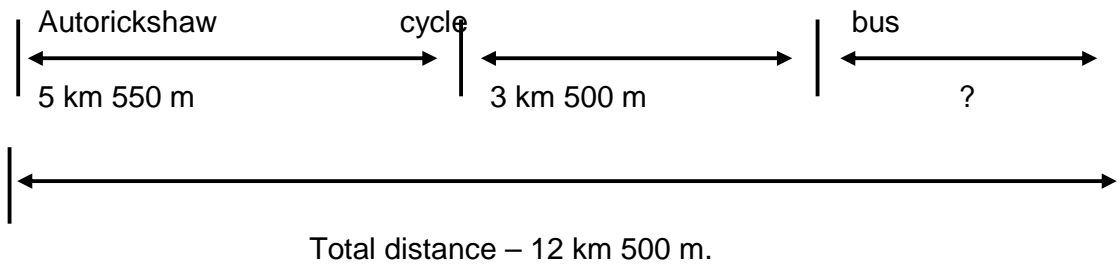
GWALIOR GLORY HIGH SCHOOL
NEEMCHANDOHA SHIVPURI LINK ROAD, GWALIOR
Extended Learning Activity Worksheet - (2018-19)

SUBJECT : MATHEMATICS

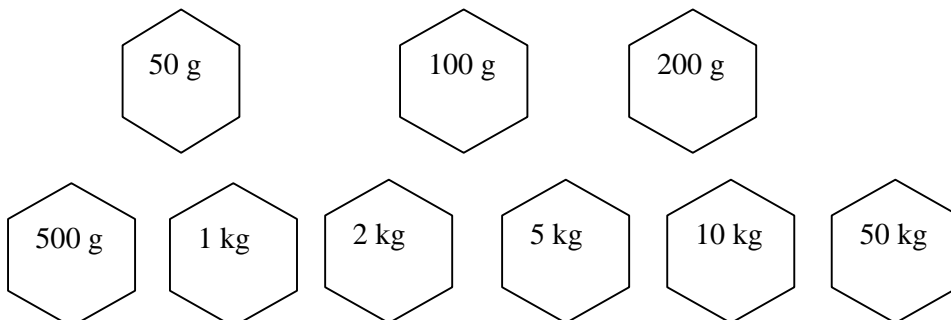
CLASS - IV

NAME: _____ SEC : _____ ROLLNO : _____ DATE : _____

Q.1 Find the distance travelled by bus.




Q.2 The grocer has the following weights with him -




Using the above weights help him weigh the items listed below


12 kg of oil




37 kg of onion



11 kg 600 gm of rice



950 g of salt



67 kg of wheat

